

first grade

STORY PROBLEMS


My Little Book of
Story Problems!



My Little Book of
Story Problems!



My Little Book of
Story Problems!




My Little Book of
Story Problems!



My Little Book of
Story Problems!




My Little Book of
Story Problems!



By: _____

My Little Book of
Story Problems!



By: _____

My Little Book of
Story Problems!



By: _____

My Little Book of
Story Problems!



By: _____

My Little Book of
Story Problems!





By: _____

There were 9 apples on the tree.
Jake picked 3 of them. How many
apples are left on the tree?

Show your work:



Number Sentence:



There were 9 apples on the tree.
Jake picked 3 of them. How many
apples are left on the tree?

Show your work:

Number Sentence:



We have 10 chairs at our dining room table. Tom, Betty, their 3 kids, Bill, Jen, and their 4 kids are coming over for dinner. Do we have enough seats for everyone?

Show your work:


Show the number sentence:



We have 10 chairs at our dining room table. Tom, Betty, their 3 kids, Bill, Jen, and their 4 kids are coming over for dinner. Do we have enough seats for everyone?

Show your work:

Show the number sentence:



You and your sister have to share a box of 12 candy canes. How many candy canes should you each get so that it is fair?

Show your work:

Number Sentence:



You and your sister have to share a box of 12 candy canes. How many candy canes should you each get so that it is fair?

Show your work:

Number Sentence:



Emily has 20 charms on her bracelet.
Some are silver and some are gold.
Draw one possible way her bracelet
could look below.

Show your work:


Number Sentence:



Emily has 20 charms on her bracelet.
Some are silver and some are gold.
Draw one possible way her bracelet
could look below.

Show your work:

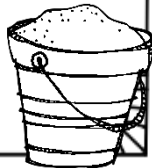


Number Sentence:



My mom and I got to the beach at 4pm. We stayed for 2 and a half hours. What time did we leave?

Show your work:



Draw the time on the clock:



My mom and I got to the beach at 4pm. We stayed for 2 and a half hours. What time did we leave?

Show your work:

Draw the time on the clock:



THANK YOU!!!

STORY PROBLEMS

Thank you for purchasing my Story Problems for the Whole Year! I hope you and your students enjoy them in your classroom.

For more ideas and freebies, feel free to

visit me at:

<http://thankgoditsfirstgrade.blogspot.com>

Susan